



SOLAR SYSTEM WORKSHEET FOR CLASS 3

VOLCANOES

LABEL THE PARTS OF A VOLCANO AND FILL IN THE BLANKS.

lava

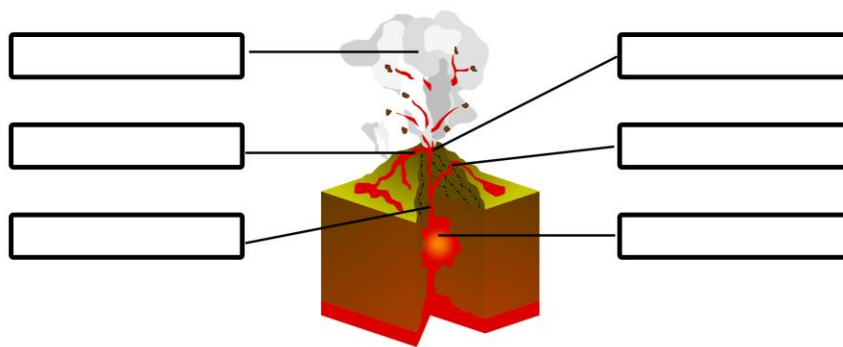
ash

magma

crater

central vent

side vent



Molten rock called _____ comes from the Earth's mantle.


When it reaches the surface of the Earth scientists call it _____ .

Clouds of tiny particles emitted from a volcanic eruption are called _____ .

The largest tube through which magma travels to the surface is the _____ of a volcano.

Sometimes lava comes out of a smaller tubes called _____ .

The _____ is the bowl shaped opening at the top of a volcano.





SOLAR SYSTEM WORKSHEET FOR CLASS 3

VOLCANOES

CORRECT ANSWERS

lava

ash

magma

crater

central vent

side vent

ash

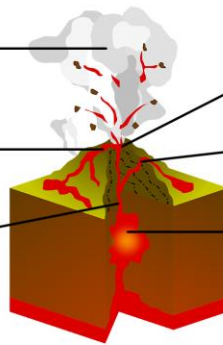
crater

lava

side vent

central vent

magma



Molten rock called magma comes from the Earth's mantle.

When it reaches the surface of the Earth scientists call it lava.

Clouds of tiny particles emitted from a volcanic eruption are called ash.

The largest tube through which magma travels to the surface is the central vent of a volcano.

Sometimes lava comes out of a smaller tubes called side vent.

The crater is the bowl shaped opening at the top of a volcano.

